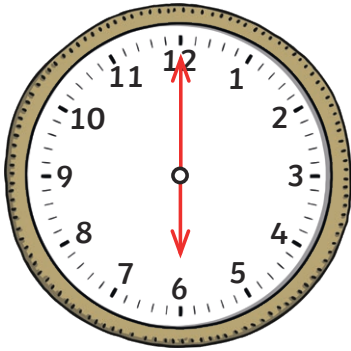


The Great Fire of London


Tell the Time



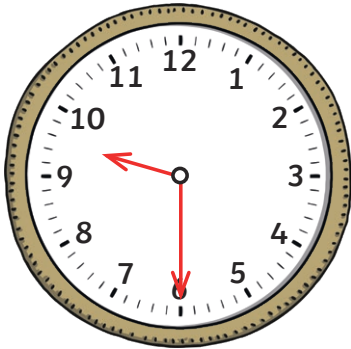
The bakery on Pudding Lane was very busy!
Use the clocks to show when each event happened.




What was the time when the bread went in the oven?




What was the time when the pies came out of the oven?




What was the time when the buns went in the oven?




What was the time when the pies came out of the oven?




At o'clock the first loaf was sold.



Draw the hands on the clock to show that a pie was sold at half past 1.



Draw the hands on the clock to show that a bun was sold at 3 o'clock.



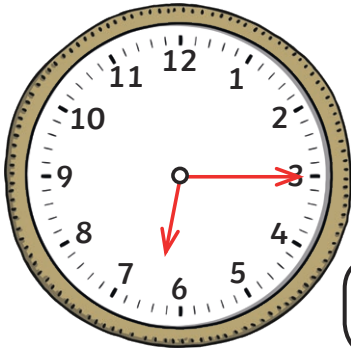
Draw the hands on the clock to show that the bakery closed at half past 5.

The Great Fire of London

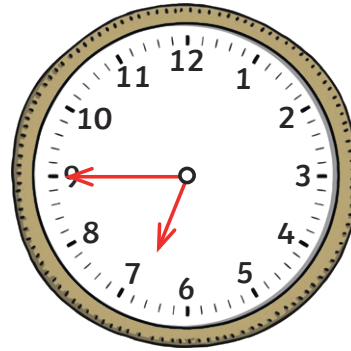
Tell the Time



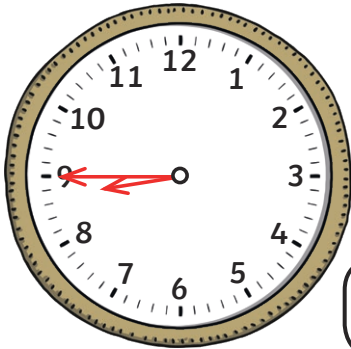
The bakery on Pudding Lane was very busy!
Use the clocks to show when each event happened.




What was the time when the bread went in the oven?




What was the time when the pies came out of the oven?

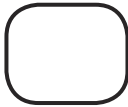



What was the time when the buns went in the oven?




What was the time when the pies came out of the oven?




At quarter past

the first loaf was sold.



Draw the hands on the clock to show that a pie was sold at quarter past 12.



Draw the hands on the clock to show that a bun was sold at quarter past 2.



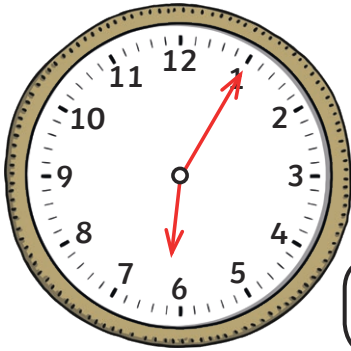
Draw the hands on the clock to show that the bakery closed at quarter to 4.

The Great Fire of London

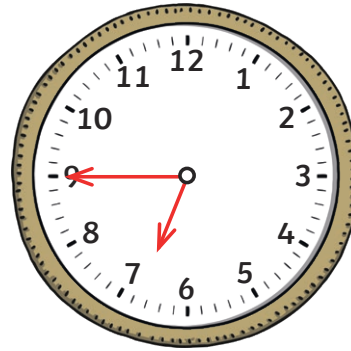
Tell the Time



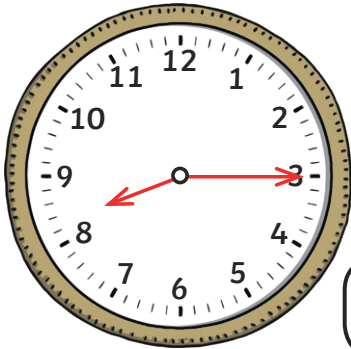
The bakery on Pudding Lane was very busy!
Use the clocks to show when each event happened.



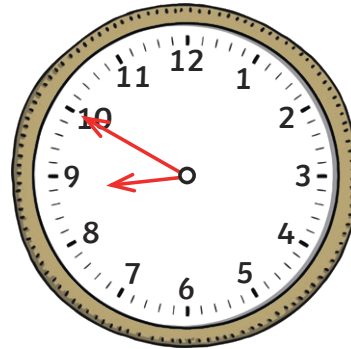
What was the time when the bread went in the oven?



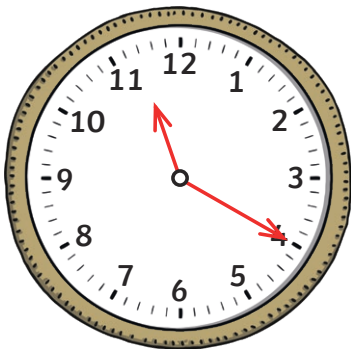
What was the time when the pies came out of the oven?



What was the time when the buns went in the oven?




What was the time when the pies came out of the oven?




At


the first loaf was sold.



Draw the hands on the clock to show that a pie was sold at twenty-five to 1.



Draw the hands on the clock to show that a bun was sold at twenty past 3.



Draw the hands on the clock to show that the bakery closed at ten to 5.